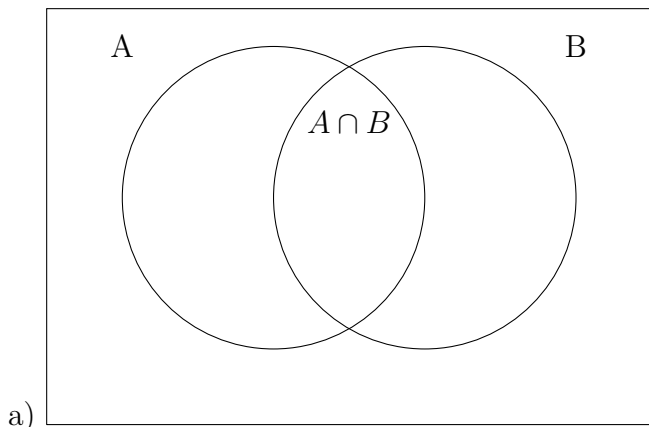


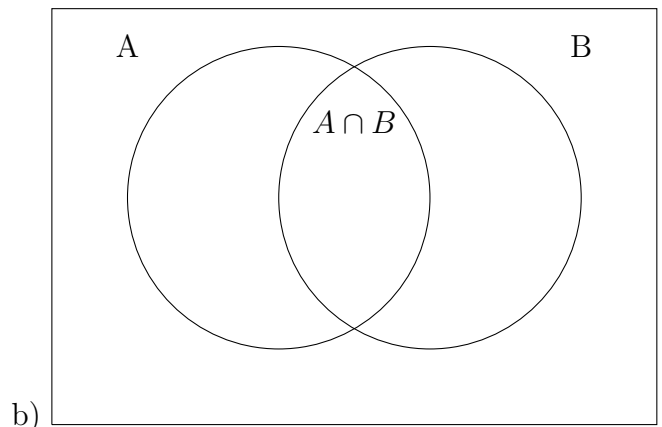
1. Complete the venn diagram with the information given:



$$A = \{red, green, blue\}$$

$$B = \{red, yellow, blue\}$$

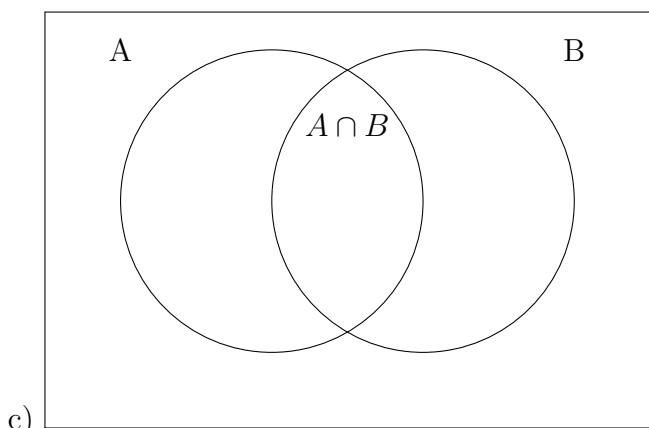
$$U = \{red, green, blue, yellow, black\}$$



$$A = \{apples, bananas, oranges\}$$

$$B = \{apples, oranges, pears\}$$

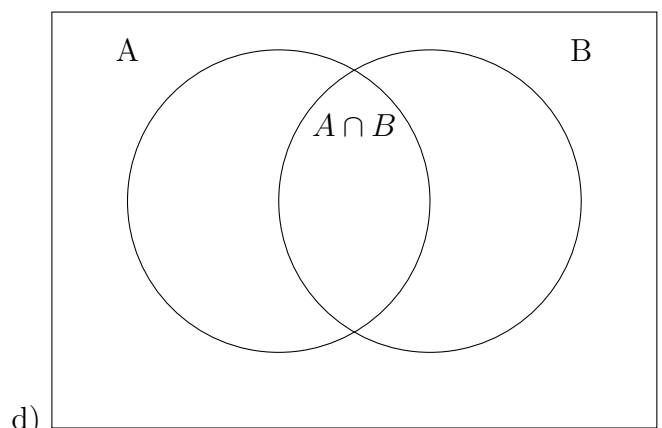
$$U = \{apples, oranges, pears, \\ bananas, grapefruits, pineapples\}$$



$$A = \{cars, vans, lorries\}$$

$$B = \{cars, bicycles, motorbikes\}$$

$$U = \{cars, vans, buses, bicycles, \\ motorbikes, lorries\}$$



$$A = \{daisies, buttercups, petunias\}$$

$$B = \{grass, daises, buttercups\}$$

$$U = \{grass, daises, buttercups, \\ petunias, cabbages\}$$